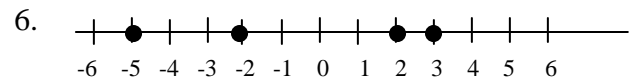
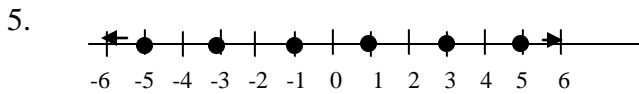
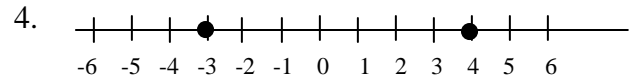
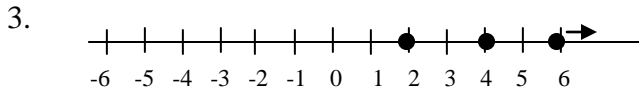
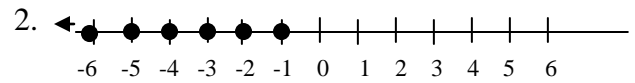
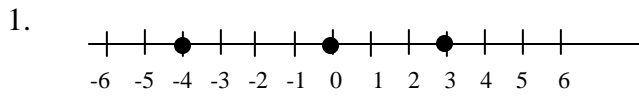


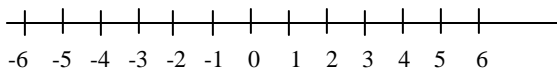
# Homework: Integers and the Number Line

Name the set of numbers graphed. If there is an obvious pattern, describe the set in words.

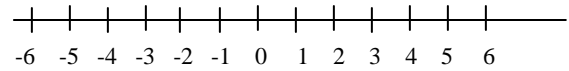


Graph the described set of numbers on the number lines below.

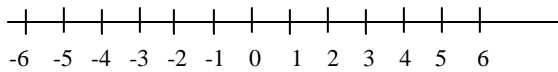
7.  $\{-1, 0, 3, 5\}$



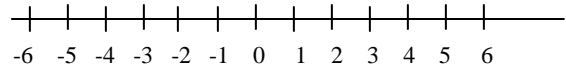
8.  $\{-4, -2, 0, 2, 4\}$



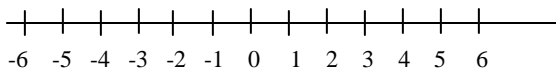
9.  $\{\text{all integers greater than } 2\}$



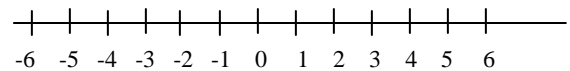
10.  $\{\text{even integers}\}$



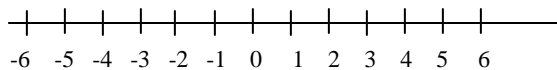
11.  $\{-5, -2, 1, 6\}$



12.  $\{\text{integers greater than } -4 \text{ and less than } 5\}$



13.  $\{\text{positive odd integers}\}$



14.  $\{\text{negative integers}\}$

